



Remark:
Teacher's Sign:

Duration: 7:45 a.m. to 9:00 a.m.
Max. Marks- 20
Marks obtained: _____
20

Name: _____ Class & Sec: _____ Date: **17.01.2024** Roll No: _____


(This question paper consists of 4 printed pages.)

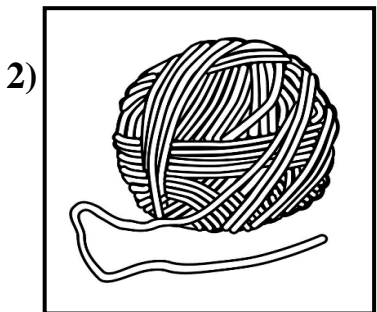
I. Choose the correct answer from the help box and fill in the blanks: (1/2 × 6 = 3 marks)

1. I taste ice-cream with my _____.
2. _____ clothes keep our body cool.
3. Food gives us _____ to work and play.
4. Very tall buildings are known as _____.
5. Always walk on the _____.
6. Food eaten at a particular time is called a _____.

HELP BOX
energy meal footpath skyscrapers tongue Cotton

II. Name the animal from which we get the following: (1/2 × 3 = 1 1/2 marks)











III. Write the answer in one word or a phrase:

($\frac{1}{2} \times 4 = 2$ marks)

1. What does the red light mean on a traffic light? **Ans:** _____
2. Where do we get cotton from? **Ans:** _____
3. Which is the largest sense organ? **Ans:** _____
4. What is the name of the meal that we eat at night? **Ans:** _____

IV. In which room will you find the following things:

($\frac{1}{2} \times 4 = 2$ marks)

 <input data-bbox="251 913 795 997" type="text"/>	 <input data-bbox="885 913 1437 997" type="text"/>
 <input data-bbox="251 1239 803 1323" type="text"/>	 <input data-bbox="885 1239 1437 1323" type="text"/>

V. Circle the correct answer:

($\frac{1}{2} \times 4 = 2$ marks)

1. The **eyes** / ears help us to hear the bell ring.
2. The **house** / school is the place where we live.
3. Always use a **zebra** / giraffe crossing to cross the road.
4. A **raincoat** / sweater is waterproof and does not let water enter inside.

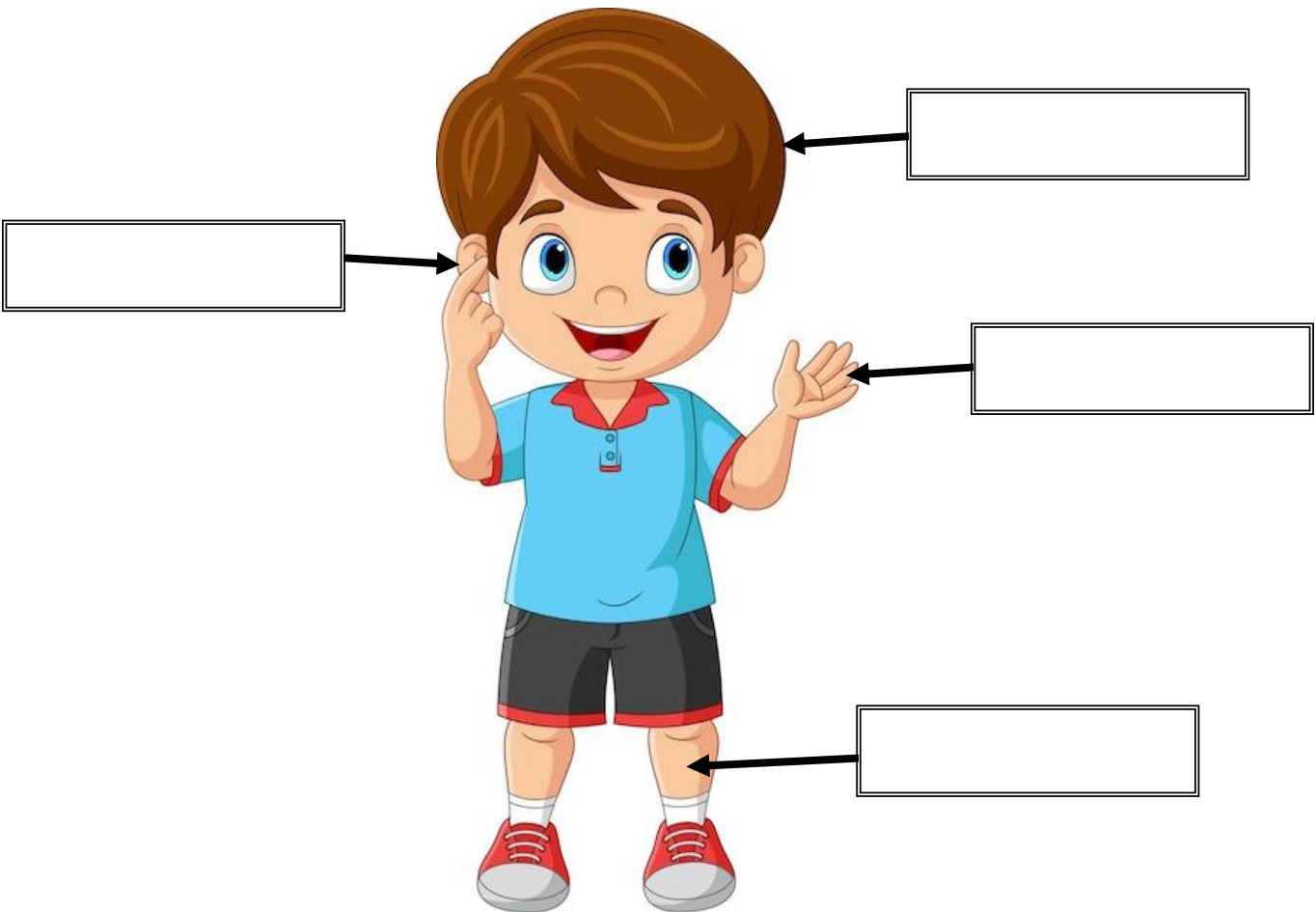
VI. Write YES or NO:

($\frac{1}{2} \times 5 = 2\frac{1}{2}$ marks)

1. We should inform an adult on getting hurt.
2. We should always wear clean clothes.
3. We get vegetables from fish.
4. We have seven sense organs.
5. We have lunch in the afternoon.

VII. Label the parts of the body indicated by the arrow mark:

($\frac{1}{2} \times 4 = 2$ marks)



VIII. Answer the following questions:

(1 × 3 = 3 marks)

1. Write any one safety rule that you should follow in school.

Ans: _____



2. What do clothes protect us from?


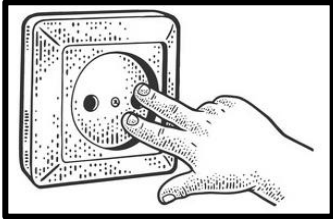


Ans: _____

3. Write any two food items that we get from plants.

a. _____

b. _____

IX. Tick  the ones that are safe and cross  the ones that are not safe to handle:
(1/2 × 4 = 2 marks)

 <input type="radio"/>	 <input type="radio"/>
 <input type="radio"/>	 <input type="radio"/>
