



\*\*\*\*\*

|  |
|--|
| <b>Remark:</b><br><br><b>Teacher's Sign:</b> |
|--|

|   |
|---|
| <b>Duration: 7:45 a.m. to 9:00 a.m.</b><br><b>Max. Marks- 20</b><br><b>Marks obtained:</b> _____<br><div style="text-align: right;"><b>20</b></div> |
|---|

\*\*\*\*\*

**Name:** \_\_\_\_\_ **Class & Sec:** \_\_\_\_\_ **Date:** 29.05.2023 **Roll No:** \_\_\_\_\_

\*\*\*\*\*

**(This question paper consists of 4 printed pages.)**

\*\*\*\*\*

**I. Choose the correct word from the help box and fill in the blanks-** (1/2 × 5 = 2 1/2 marks)

|  |
|--|
| <b>bark , roots , dyes , leaves , stem</b> |
|--|

- 1) The \_\_\_\_\_ carries water and food to all parts of the plant.
- 2) We make tea from dried \_\_\_\_\_ of a tea plant.
- 3) The \_\_\_\_\_ of the tree keeps the wood inside, safe from insects and bad weather.
- 4) \_\_\_\_\_ give support to the plant and fix it to the soil.
- 5) We get \_\_\_\_\_ from plants like henna and indigo.

**II. Put the following plants under the correct column according to their lifespan-**

(1/2 × 3 = 1 1/2 marks)

|                                |
|--------------------------------|
| <b>mint , banyan , jasmine</b> |
|--------------------------------|

| <u>Plants that live for hundreds of years</u> | <u>Plants that live for a few years</u> | <u>Plants that live for only a few months</u> |
|---|---|---|
| _____   | _____                                   | _____   |

**III. Match the following-**

( $\frac{1}{2} \times 4 = 2$  marks)

|    |                          |         |  |
|----|--------------------------|---------|--|
| 1) | carrot and turnip        | leaves  |  |
| 2) | cauliflower and broccoli | stems   |  |
| 3) | spinach and cabbage      | roots   |  |
| 4) | ginger and sugarcane     | flowers |  |

**IV. Tick (✓) the correct answer-**

( $\frac{1}{2} \times 4 = 2$  marks)

- 1) Plants like mushroom **can** / **cannot** make their own food.
- 2) **Bamboo** / **Banyan** is one of the fastest growing plants.
- 3) **Climbers** / **Creepers** are the plants that usually bear heavy fruits.
- 4) Clove oil is used to cure **headache** / **toothache**.

**V. Name the following-**

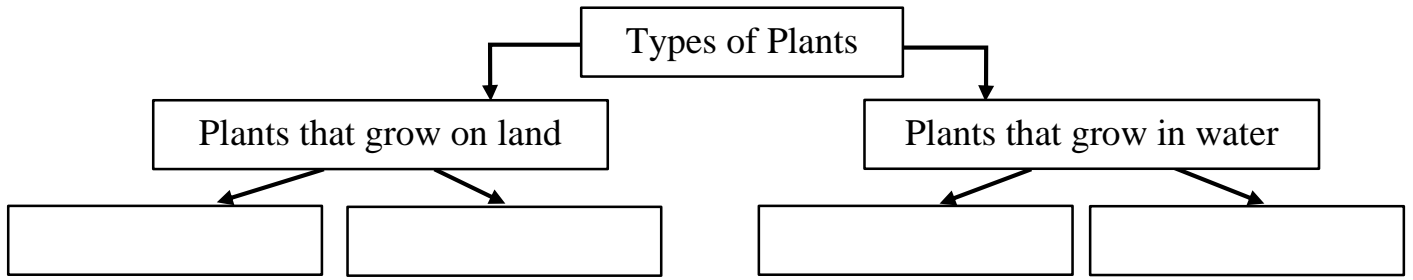
( $\frac{1}{2} \times 5 = 2\frac{1}{2}$  marks)

|   |   |
|---|---|
| 1) The 'kitchen of the plant'<br><b>Ans-</b> _____                          | 2) Any one spice<br><b>Ans-</b> _____     |
| 3) Hard, brown and thick stem of trees<br><b>Ans-</b> _____                 | 4) A medicinal plant<br><b>Ans-</b> _____ |
| 5) The part of the plant from which a baby plant grows<br><b>Ans-</b> _____ |   |

**VI. Fill in the empty boxes using the help words given below-**

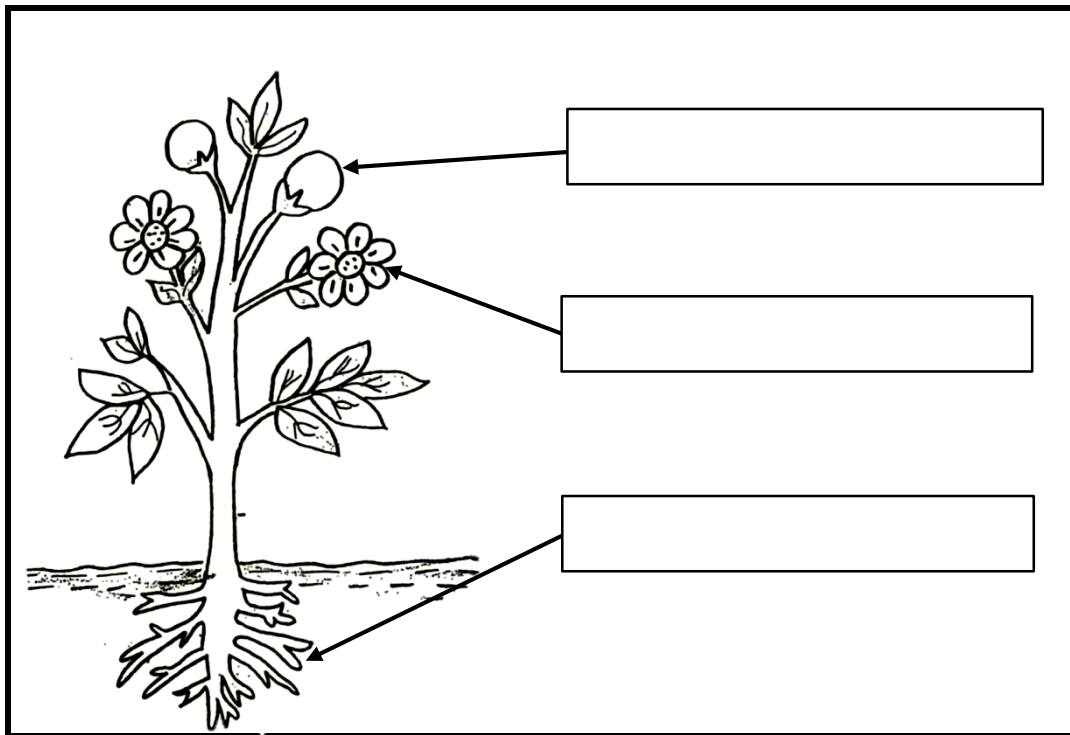
**( $\frac{1}{2} \times 4 = 2$  marks)**

**HELP BOX-** water lily , marigold , lotus , rose



**VII. Label the marked parts of the plant-**

**( $\frac{1}{2} \times 3 = 1\frac{1}{2}$  marks)**

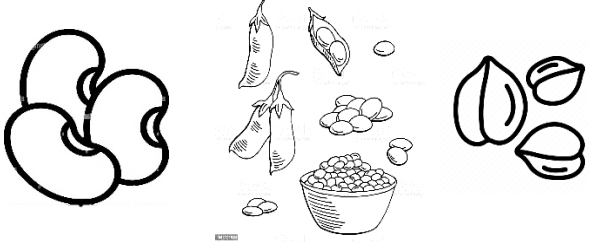
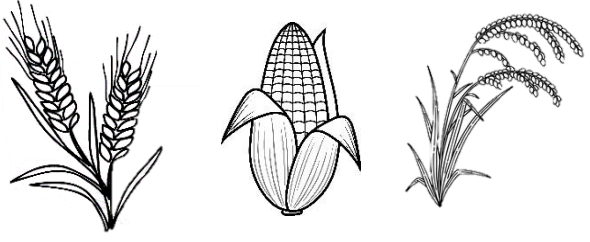


**VIII. Draw a 😊 for the correct sentences and ☹️ for the wrong ones-**

**( $\frac{1}{2} \times 4 = 2$  marks)**

- 1) Flower is the the fleshy part of the plant. 😊
- 2) Wood from trees like teak, bamboo and deodar is used to make furniture. 😊
- 3) We get gum from acacia tree. 😊
- 4) Money plant and grapevine are the examples of creepers. 😊

**IX. Identify and write the type of food grains-CEREALS OR PULSES** - ( $\frac{1}{2} \times 2 = 1$  mark)

|  |  |
|--|--|
|  |  |
| <hr/>  | <hr/>  |

**X. Answer the following questions-**

Q1- What are shrubs? Give one example.

( $1\frac{1}{2}$  marks)

**Ans-** \_\_\_\_\_  
\_\_\_\_\_  
\_\_\_\_\_

➤ **Example-** \_\_\_\_\_

Q2- How do green leaves make food for the plant?

( $1\frac{1}{2}$  marks)

**Ans-** \_\_\_\_\_  
\_\_\_\_\_  
\_\_\_\_\_

\*\*\*\*\*