



**Evaluation Test – II (2023-24)**

\*\*\*\*\*

<b>Remark:</b>  <b>Teacher's Sign:</b>
--

<b>Duration: 7:45 a.m. to 9.00 a.m.</b> <b>Max. Marks - 20</b> <b>Marks obtained:</b> _____ <div style="text-align: right;">20</div>
---

\*\*\*\*\*

Name: \_\_\_\_\_ Class & Sec: \_\_\_\_\_ Date: 26.09.2023 Roll No: \_\_\_\_\_

\*\*\*\*\*

(This question paper consists of 4 printed pages.)

\*\*\*\*\*

**I. Choose the correct answer and fill in the blanks: ( 1/2 x 4 = 2 marks )**

bones pillows skin posture
----------------------------

1. Feathers are used for filling \_\_\_\_\_.
2. We get leather from the \_\_\_\_\_ of dead animals.
3. Correct \_\_\_\_\_ keeps our body in proper shape.
4. \_\_\_\_\_ and muscles work together to help us move.

**II. What kind of animals are they? Put them in the correct column:**

( 1/2 x 6 = 3 marks )

deer goat dog duck hyena cat
------------------------------

Domestic animals	Wild animals	Pet animals
_____	_____	_____
_____	_____	_____

**III. Write True or False:**

**(  $\frac{1}{2} \times 5 = 2\frac{1}{2}$  marks )**

- 1) Giraffe eats the leftover flesh of other dead animals.
- 2) We should be kind to animals.
- 3) Rats live in a nest.
- 4) We should not buy things made out of ivory or fur.
- 5) Crocodile is a pet animal.

**IV. Tick ( ✓ ) the correct answer:**

**(  $\frac{1}{2} \times 4 = 2$  marks )**

1. Adults have **206 / 602** bones in their body.
2. **Domestic / Wild** animals live in forests.
3. Milk is used to make **idli / curd**.
4. **Horse / Lion** is used as a means of transport.

**V. Name the following:**

**(  $\frac{1}{2} \times 5 = 2\frac{1}{2}$  marks )**

1. An animal that eats the flesh of dead animals -
2. A bird that stitches leaves together to build its nest -
3. A thing made from leather -
4. A thing we get from beehives -
5. An animal that eats both plants and flesh -

**VI. Answer the following questions:**

**( 1 x 3 = 3 marks )**

1. What is a joint?

Ans. \_\_\_\_\_

\_\_\_\_\_

\_\_\_\_\_

2. How is the dung of animals useful?

Ans. \_\_\_\_\_


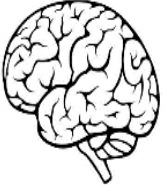
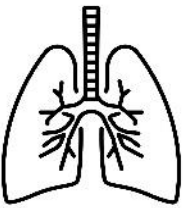
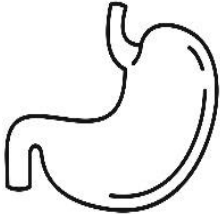
\_\_\_\_\_

3. Why are wild animals in danger? Write any one reason.

Ans. \_\_\_\_\_  
\_\_\_\_\_  
\_\_\_\_\_

**VII. Match the internal organ to its function:**

**(  $\frac{1}{2} \times 4 = 2$  marks )**

1		helps to digest the food we eat	<input type="checkbox"/>
2		help us to breathe	<input type="checkbox"/>
3		helps us to think	<input type="checkbox"/>
4		pumps blood to all body parts	<input type="checkbox"/>


VIII. Name the animal from which we get the following: ( $\frac{1}{2} \times 3 = 1 \frac{1}{2}$  marks)

1)




\_\_\_\_\_

2)



\_\_\_\_\_



3)



\_\_\_\_\_

IX. Tick the correct posture:

( $\frac{1}{2} \times 1 = \frac{1}{2}$  mark)



X. Label the parts of the body indicated by the arrow mark: ( $\frac{1}{2} \times 2 = 1$  mark)

