



INDIAN SCHOOL SOHAR
TERM - II EXAM (2022-23)
SUBJECT: EVS
CLASS – III

SET –A

Date of Exam: 12-03-2023

Time Allotted: 2 hours

Max. Marks: 40

(Note: This question paper consists of 6 printed pages. Please check that you have all the pages.)

Name: _____

Roll No.: _____

Section: _____

GR No: _____

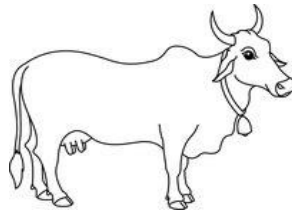
Subject Teacher's Sign with date

Invigilator's Sign with date

Q1. Choose and write the correct option in the given space:

(1×6=6)

i. Look at the picture and name the shelter of this animal.



A) coop


C) stable

B) kennel

D) shed

1. Answer: _____

ii. In the given picture, name the plant part used as food.



A)
roots

stem

C)

B) flower

D) fruit

2. Answer: _____

iii. I am a house built on poles or a stilt. Where will you find me?

A) in Assam

C) in Desert

3. Answer: _____

iv. Identify the source of water that is too salty to taste.

A) river

C) underground water

B) ocean

D) well

4. Answer: _____

v. Complete the following

Soldiers : tent :: Gypsies: _____

A) caravan

C) igloo

B) multi-storyed buildings

D) slums

5. Answer: _____

vi. Four children made the following statements about balanced diet. Whose statement is **TRUE**?

A) Tina: Eggs make us fat.

B) Rana: Vegetables are energy giving food.

C) Sita: Roughage keeps our digestive system clean.

D) Raj: Rice and wheat are junk food.

6. Answer: _____

Q2. Read the passage and answer the questions that follow:

(2×2=4)

We all love our planet Earth. Earth is not only a beautiful planet but also helps us to make our life better and beautiful by giving many things. It is our duty to take care of our Mother Earth. We should use all the things given by Earth carefully.

i. Name any four things we get from our environment.

1. _____

2. _____

3. _____

4. _____

ii. List any four ways to take care of our Mother Earth.

1. _____

2. _____

3. _____

4. _____

Q3. Answer the following in one or two sentences:-

(2×6=12)

i. a. Define Balanced diet.

b. Give one difference between Wild animals and Domestic animals.

S.No.	Wild animals	Domestic animals
1.		

ii. Write any two ways to keep our house clean.

1. _____

2. _____

iii. Identify and tick (✓) the ways to keep the air clean and write it in the given box.



iv. Arrange the food items in the appropriate columns given below.

Cloves, Honey, Tomato, Spinach

Spices	Food that is leaf of the plant	Food we get from animals	Fruit
--------	--------------------------------	--------------------------	-------

--	--	--	--

v. Write any two uses of soil?

1. _____
2. _____

vi. Complete the table.

Name of the food	Indian State we find this food
1. <i>Idli chutney</i>	
2.	Punjab

Q4. Answer the following: -

(3 × 6 = 18)

i. Give one-word answer for the following: -

- a. House made of ice blocks _____
- b. In big cities like Mumbai poor people live in this area _____
- c. Beautiful patterns made in front of our house with rice flour or coloured powder _____

ii. Give reasons:

- a. Gorillas construct new bed each night.

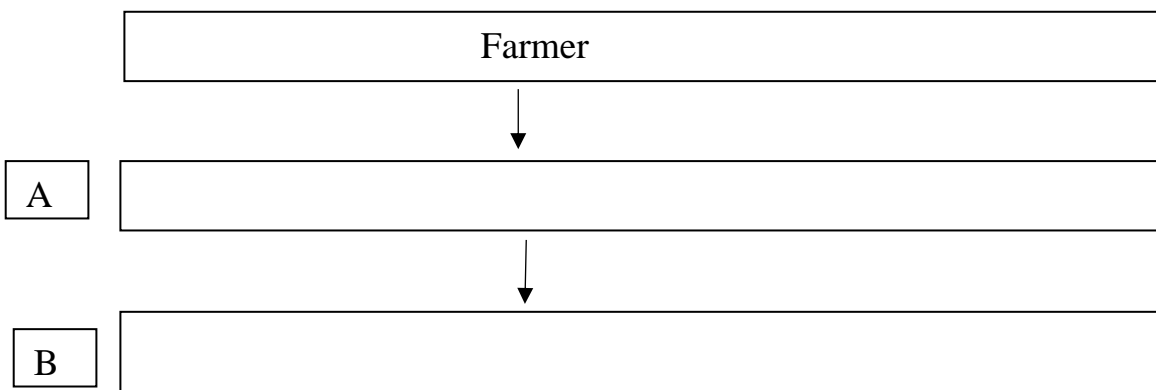
- b. Lady bird is farmer's best friend.

c. We need to conserve soil.

iii. Draw and label a diagram to show the water cycle.



iv. Complete the following flow chart from A to C to show how food reaches our house.





C

v. Give one example for each of the following:

a. Protective food _____

b. Roughage _____

c. Body building food _____

vi. Draw and write the three states of water.

S.No.	Name the state	Draw the state of water



INDIAN SCHOOL SOHAR
TERM - II EXAM (2022-23)
SUBJECT: EVS
CLASS – III
SET –B

Date of Exam: 12-03-2023
Time Allotted: 2 hours

Max. Marks: 40

(Note: This question paper consists of 6 printed pages. Please check that you have all the pages.)

Name: _____

Roll No.: _____

Section: _____

GR No: _____

Subject Teacher's Sign with date

Invigilator's Sign with date

Q1. Choose and write the correct option in the given space:

(1×6=6)

i. Look at the picture and name the shelter of the animal.



A) coop


B) stable

B) kennel

D) shed

1. Answer: _____

ii. In the given picture, name the plant part used as food.



A) stem

C) roots

B) flower

D) fruit

2. Answer: _____

iii. I am a house built on a boat. Where will you find me?

A) in Assam

C) in Desert

B) in Calcutta

D) in Kashmir

3. Answer: _____

iv. Identify the source of water that is too salty to taste.

- A) river
- B) ocean
- C) underground water
- D) well

4. Answer: _____

v. Complete the following

Soldiers : tent :: Gypsies: _____

- A) caravan
- B) multi-storyed buildings
- C) igloo
- D) slums

5. Answer: _____

vi. Four children made the following statements about balanced diet. Whose statement is **TRUE**?

- A) Tina: Eggs make us fat.
- B) Rana: Vegetables are energy giving food.
- C) Sita: Roughage keeps our digestive system clean.
- D) Raj: Rice and wheat are junk food.

6. Answer: _____

Q2. Read the passage and answer the questions that follow: (2×2=4)

We all love our planet Earth. Earth is not only a beautiful planet but also helps us to make our life better and beautiful by giving many things. It is our duty to take care of our Mother Earth. We should use all the things given by Earth carefully.

i. Name any four things we get from Our environment.

- 1. _____
- 2. _____
- 3. _____
- 4. _____

ii. List any four ways to take care of our Mother Earth.

- 1. _____
- 2. _____
- 3. _____
- 4. _____

Q3. Answer the following in one or two sentences:-

(2×6=12)

i. a. Define Rain water harvesting.

_____.

b. Give one difference between Pet animals and Domestic animals.


S.No.	Pet animals	Domestic animals
1.		

ii. Write any two ways to keep our house clean.

1. _____

2. _____

iii. Identify and tick (✓) the ways to keep the air clean and write it in the given box.



iv. Arrange the food items in the appropriate columns given below.

Turmeric, Honey, Mango, Spinach

Spice	Food that is leaf of the plant	Food we get from animals	Fruit

v. Write any two uses of soil?

1. _____

2. _____

vi. Complete the table.

Name of the food	Indian State we find this food
1. <i>Dhokla</i>	
2.	Calcutta

Q4. Answer the following:-

(3 × 6 = 18)

i. Give one-word answer for the following: -

a. House made of ice blocks _____

b. In big cities like Mumbai poor people live in this area _____

c. Beautiful patterns made in front of our house with rice flour or coloured powder _____


ii. Give reasons:

a. Gorillas construct new bed each night.

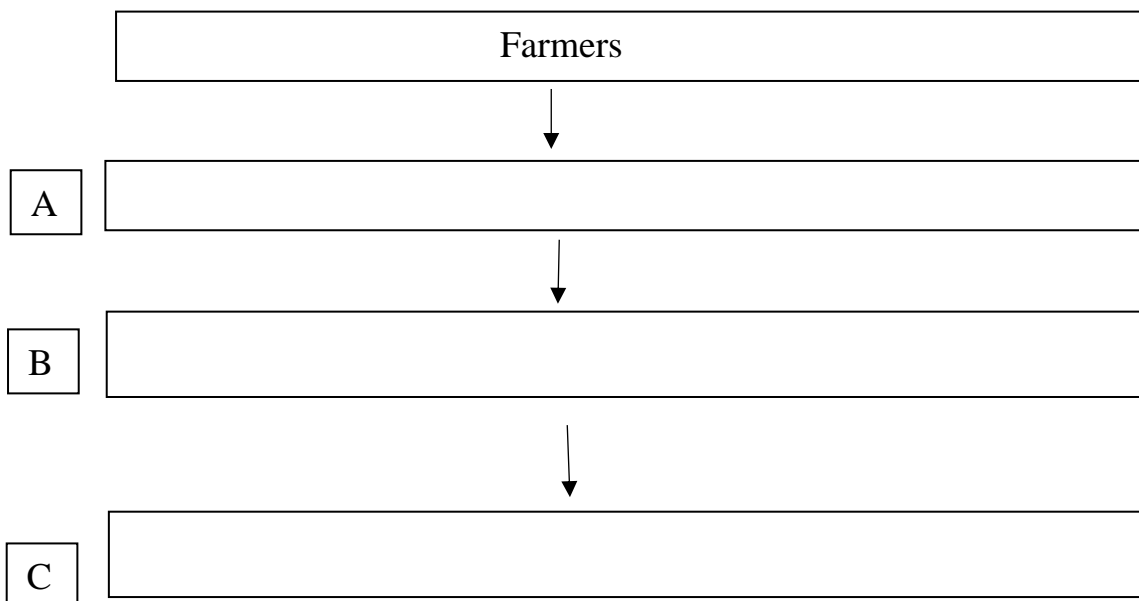
b. We should never throw garbage in water bodies.

c. We need to conserve soil.

iii. Draw and label a diagram to show the water cycle.



iv. Complete the following flow chart from A to C to show how food reaches our house.



v. Give one example for each of the following:

1. Protective food _____

2. Roughage _____

3. Energy giving food _____

vi. Draw and write the three states of water.

S.No.	Name the state	Draw the state of the water
